

NAME:

KEY

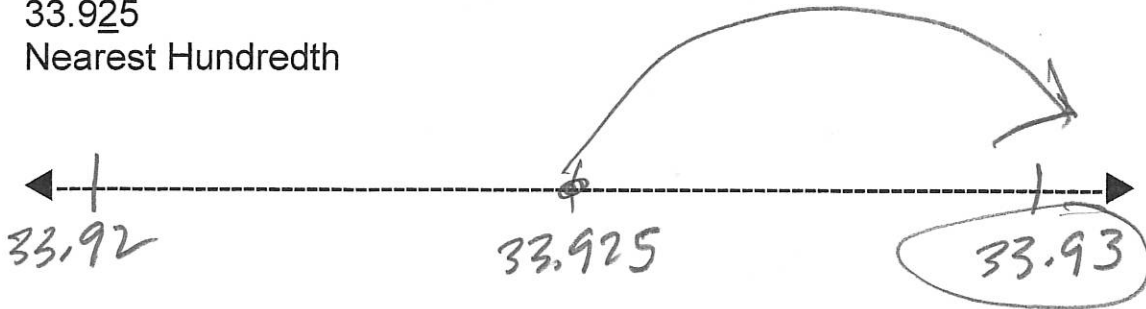
#:

Rm:


9/19

Underline the place value you are rounding to.


33.925
Nearest Hundredth



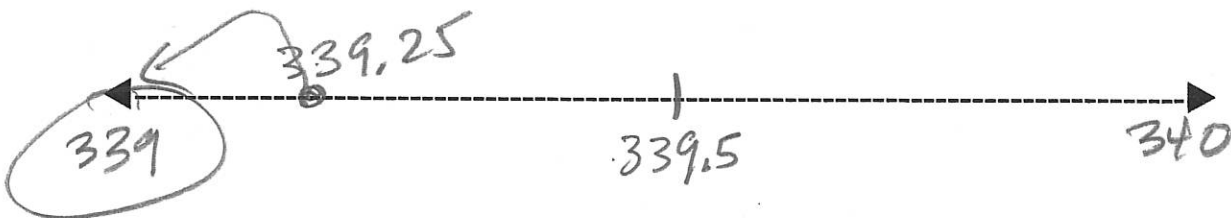
33.925
Nearest Whole Number



33.925
Nearest Tenth



339.25
Nearest Whole Number



NAME:

#:

Rm:

Independent Practice

In 11-14, round each decimal to the nearest whole number.

11. $\underline{4}$.5
5

12. $\underline{57}$.3
57

13. $\underline{34}$.731
35

14. $\underline{215}$.39
215

In 15-18, round each number to the place of the underlined digit.


15. 7. $\underline{1}$ 58
7.2

16. 0. $\underline{7}$ 58
0.76

17. 6. $\underline{4}$ 382
6.44

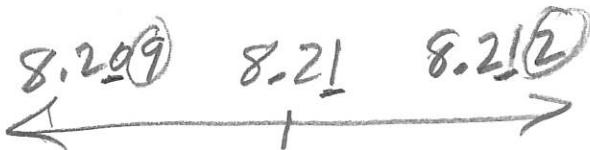
18. 84. $\underline{7}$ 82
84.7

19. The picture at the right shows the length of an average American alligator. What is the length of the alligator rounded to the nearest tenth?



4.4 meters

20. © MP.2 Reasoning Name two different numbers that round to $\underline{8.2}$ when rounded to the nearest hundredth.



21. Number Sense To the nearest hundred, what is the greatest whole number that rounds to $\underline{2,500}$? the least whole number?

$\underline{2,500}$

$\underline{2,450}$

26. Find two numbers that round to $\underline{35.4}$ when rounded to the nearest tenth. Write the numbers in the box.

		35.4		35.4	
35.45	34.42	35.391	35.345	35.44	35.041
35.5	34.4		35.3		35